

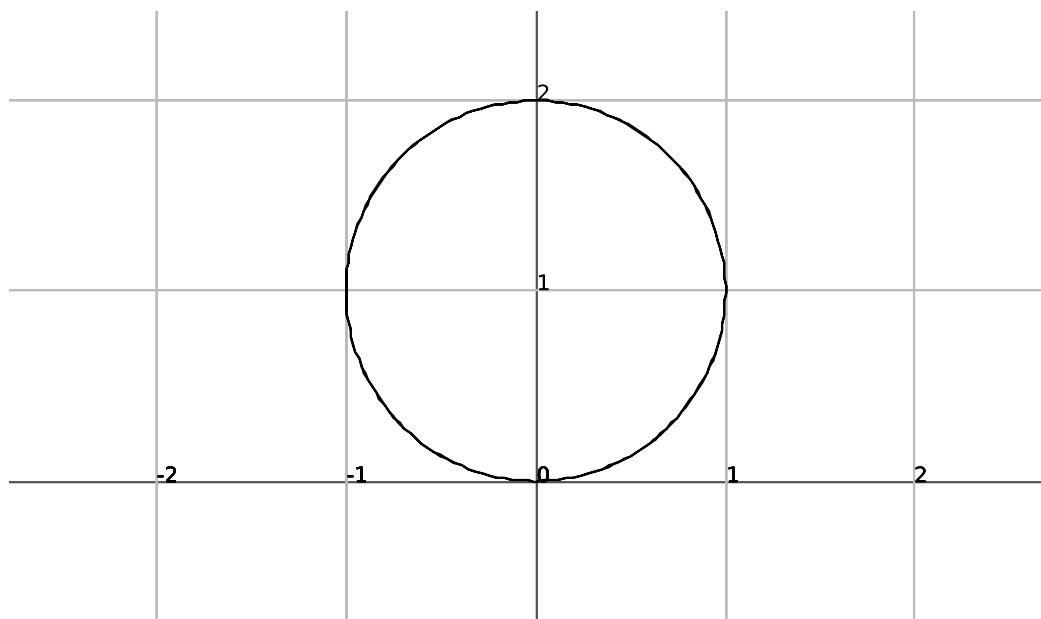
Review Packet for Final Exam

Material since Exam #3

Math 121-D. Benedetto

Polar Coordinates: For each problem, sketch the polar curve(s) and answer the related question(s).

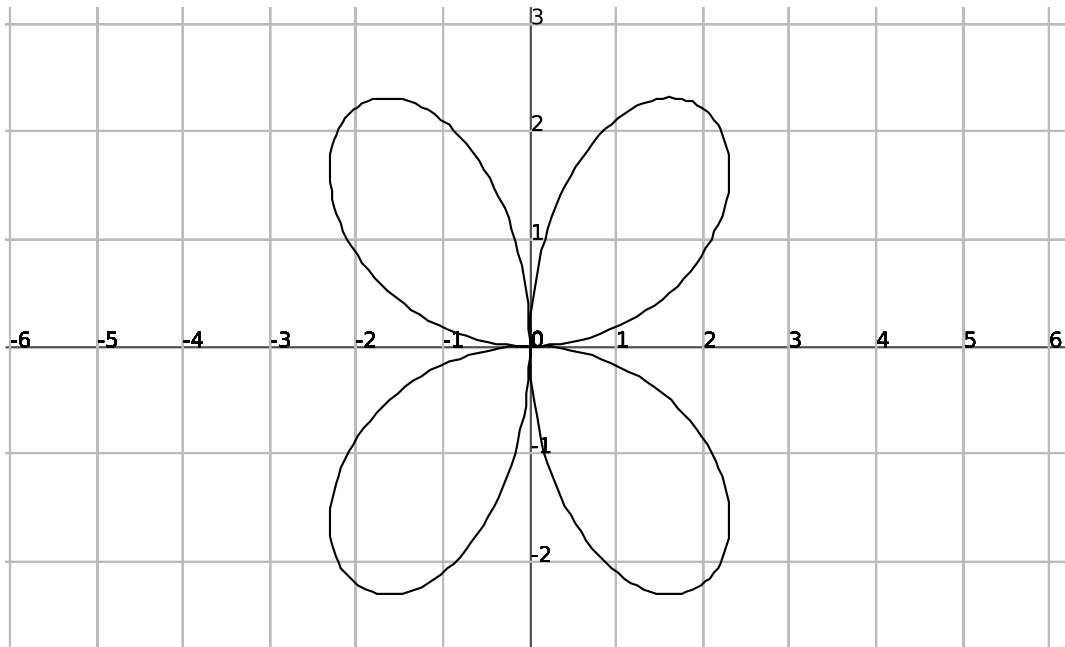
1. Find the area bounded by $r = 2 \sin \theta$.



First note that this is just a circle of radius 1, so the area should be π . We will use the area formula for polar curves to double check this. It's important to note that one cycle of the polar circle closes up on itself as θ ranges from $\theta = 0$ to just $\theta = \pi$.

$$\begin{aligned} \text{Area} = A &= \frac{1}{2} \int_0^\pi r^2 d\theta = \frac{1}{2} \int_0^\pi (2 \sin \theta)^2 d\theta = \frac{1}{2} \int_0^\pi 4 \sin^2 \theta d\theta = 2 \int_0^\pi \sin^2 \theta d\theta \\ &= 2 \int_0^\pi \frac{1 - \cos(2\theta)}{2} d\theta = \int_0^\pi 1 - \cos(2\theta) d\theta = \theta - \frac{\sin(2\theta)}{2} \Big|_0^\pi = \left(\pi - \frac{\sin(2\pi)}{2} \right) - \left(0 - \frac{\sin 0}{2} \right) \\ &= \boxed{\pi} \end{aligned}$$

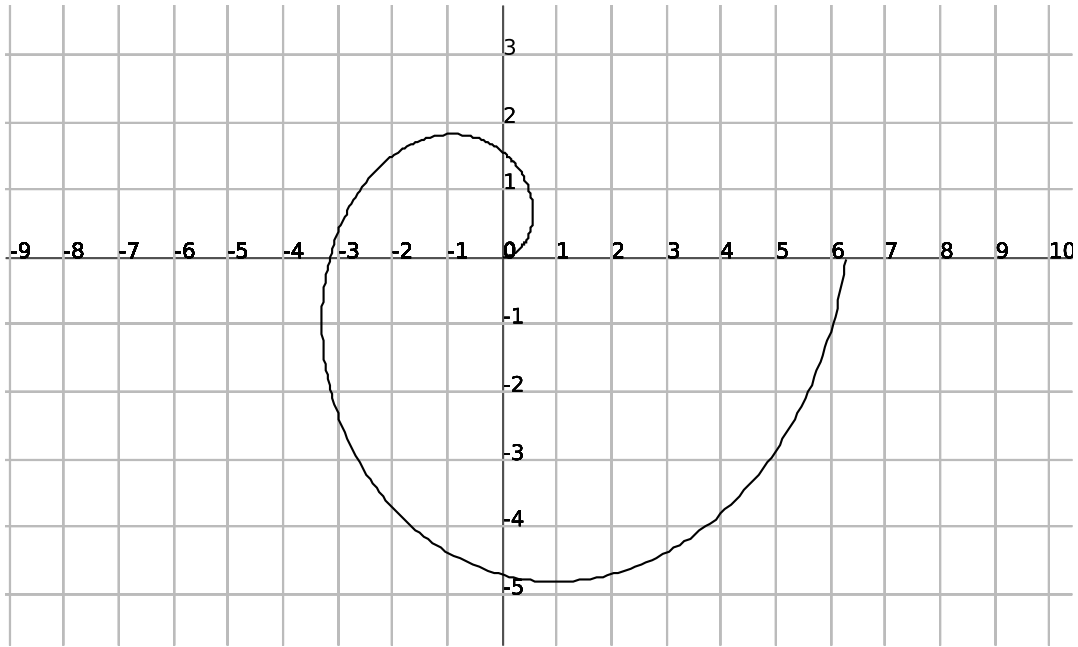
2. Find the area bounded by one petal loop of the 4 leaved rose $r = 3 \sin(2\theta)$.



It's important to note that one loop of the polar petal closes up on itself as θ ranges from $\theta = 0$ to just $\theta = \frac{\pi}{2}$.

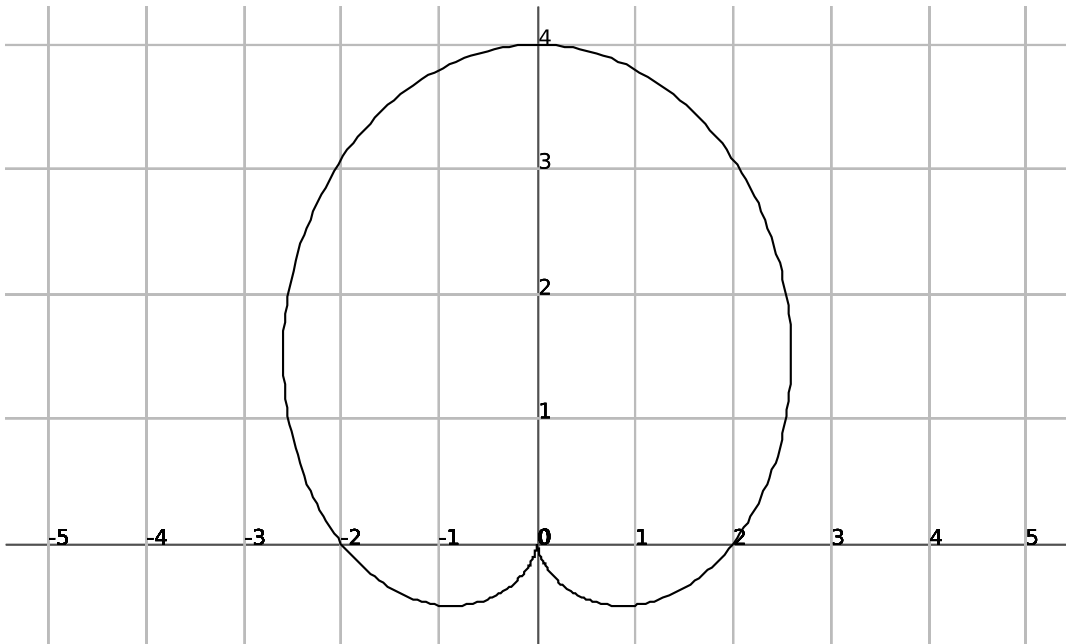
$$\begin{aligned} A &= \frac{1}{2} \int_0^{\frac{\pi}{2}} r^2 d\theta = \frac{1}{2} \int_0^{\frac{\pi}{2}} (3 \sin(2\theta))^2 d\theta = \frac{1}{2} \int_0^{\frac{\pi}{2}} 9 \sin^2(2\theta) d\theta = \frac{9}{2} \int_0^{\frac{\pi}{2}} \sin^2(2\theta) d\theta \\ &= \frac{9}{2} \int_0^{\frac{\pi}{2}} \frac{1 - \cos(4\theta)}{2} d\theta = \frac{9}{4} \int_0^{\frac{\pi}{2}} 1 - \cos(4\theta) d\theta = \frac{9}{4} \left(\theta - \frac{\sin(4\theta)}{4} \right) \Big|_0^{\frac{\pi}{2}} \\ &= \frac{9}{4} \left(\left(\frac{\pi}{2} - \frac{\sin(2\pi)}{4} \right) - \left(0 - \frac{\sin 0}{2} \right) \right) = \boxed{\frac{9\pi}{8}} \end{aligned}$$

3. Find the area bounded by $r = \theta$ with $0 \leq \theta \leq 2\pi$



$$A = \frac{1}{2} \int_0^{2\pi} r^2 d\theta = \frac{1}{2} \int_0^{2\pi} \theta^2 d\theta = \frac{1}{2} \left(\frac{\theta^3}{3} \right) \Big|_0^{2\pi} = \frac{1}{2} \left(\frac{(2\pi)^3}{3} - 0 \right) = \frac{1}{2} \left(\frac{8\pi^3}{3} \right) = \boxed{\frac{4\pi^3}{3}}$$

4. Find the area bounded by the cardioid $r = 2 + 2 \sin \theta$.

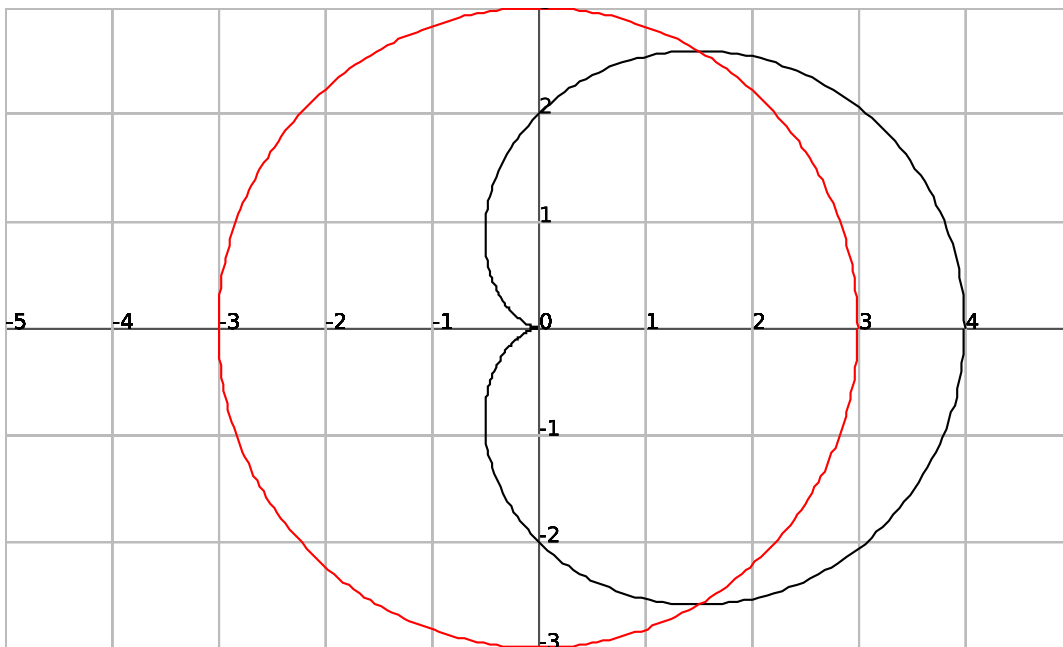


It's important to note that one full cycle of the cardioid closes up on itself as θ ranges from $\theta = 0$ to $\theta = 2\pi$.

$$A = \frac{1}{2} \int_0^{2\pi} r^2 d\theta = \frac{1}{2} \int_0^{2\pi} (2 + 2 \sin(\theta))^2 d\theta = \frac{1}{2} \int_0^{2\pi} 4 + 8 \sin \theta + 4 \sin^2 \theta d\theta$$

$$\begin{aligned}
&= \frac{1}{2} \int_0^{2\pi} 4 + 8 \sin \theta + 4 \left(\frac{1 - \cos(2\theta)}{2} \right) d\theta = \frac{1}{2} \int_0^{2\pi} 4 + 8 \sin \theta + 2(1 - \cos(2\theta)) d\theta \\
&= \frac{1}{2} \int_0^{2\pi} 6 + 8 \sin \theta - 2 \cos(2\theta) d\theta = \frac{1}{2} (6\theta - 8 \cos \theta - \sin(2\theta)) \Big|_0^{2\pi} \\
&= \frac{1}{2} ((12\pi - 8 \cos(2\pi) - \sin(4\pi)) - (0 - 8 \cos 0 - \sin 0)) \\
&= \frac{1}{2} ((12\pi - 8 - 0) - (0 - 8 - 0)) = \frac{1}{2} (12\pi - 8 + 8) = \boxed{6\pi}
\end{aligned}$$

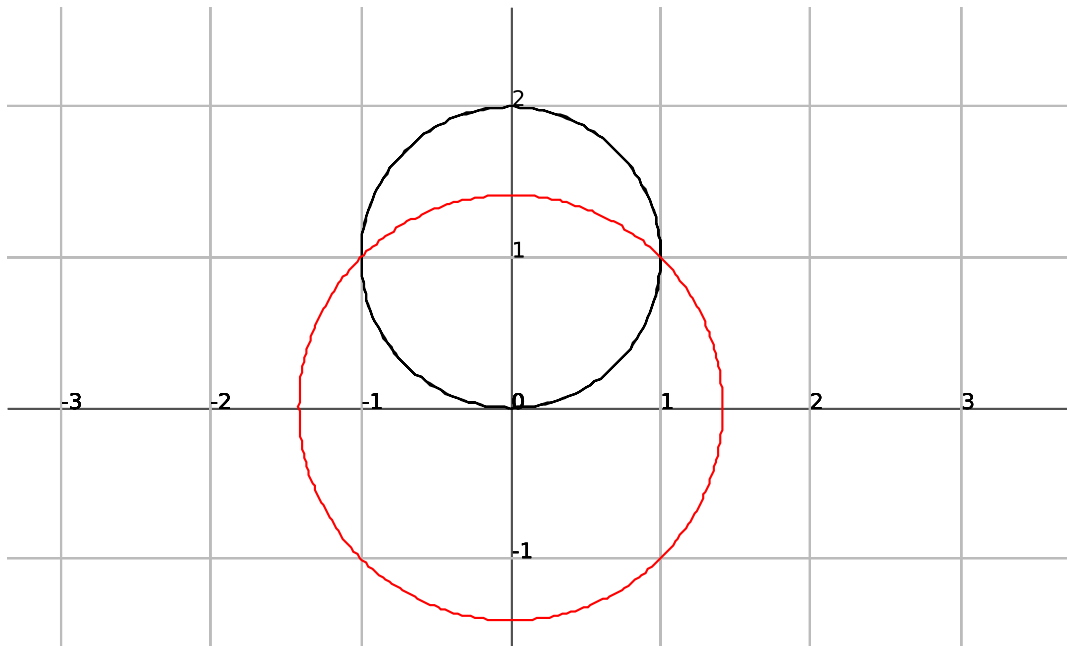
5. Find the area bounded inside $r = 2 + 2 \cos \theta$ and outside $r = 3$.



These two polar curves intersect when $2 + 2 \cos \theta = 3 \Rightarrow 2 \cos \theta = 1 \Rightarrow \cos \theta = \frac{1}{2} \Rightarrow \theta = -\frac{\pi}{3}$ or $\theta = \frac{\pi}{3}$. Using symmetry, we will integrate from $\theta = 0$ to $\theta = \frac{\pi}{3}$ and double that area.

$$\begin{aligned}
\text{Area} = A &= 2 \left(\frac{1}{2} \int_0^{\frac{\pi}{3}} ((\text{outer } r)^2 - (\text{inner } r)^2) d\theta \right) = \int_0^{\frac{\pi}{3}} ((2 + 2 \cos \theta)^2 - 3^2) d\theta \\
&= \int_0^{\frac{\pi}{3}} 4 + 8 \cos \theta + 4 \cos^2 \theta - 9 d\theta = \int_0^{\frac{\pi}{3}} -5 + 8 \cos \theta + 4 \left(\frac{1 + \cos(2\theta)}{2} \right) d\theta \\
&= \int_0^{\frac{\pi}{3}} -5 + 8 \cos \theta + 2 + 2 \cos(2\theta) d\theta = \int_0^{\frac{\pi}{3}} -3 + 8 \cos \theta + 2 \cos(2\theta) d\theta \\
&= -3\theta + 8 \sin \theta + \sin(2\theta) \Big|_0^{\frac{\pi}{3}} = (-\pi + 8 \sin(\frac{\pi}{3}) + \sin(\frac{2\pi}{3})) - (0 + 8 \sin 0 + \sin 0) \\
&= -\pi + 8 \left(\frac{\sqrt{3}}{2} \right) + \left(\frac{\sqrt{3}}{2} \right) = -\pi + 4\sqrt{3} + \frac{\sqrt{3}}{2} = \boxed{\frac{9\sqrt{3}}{2} - \pi}
\end{aligned}$$

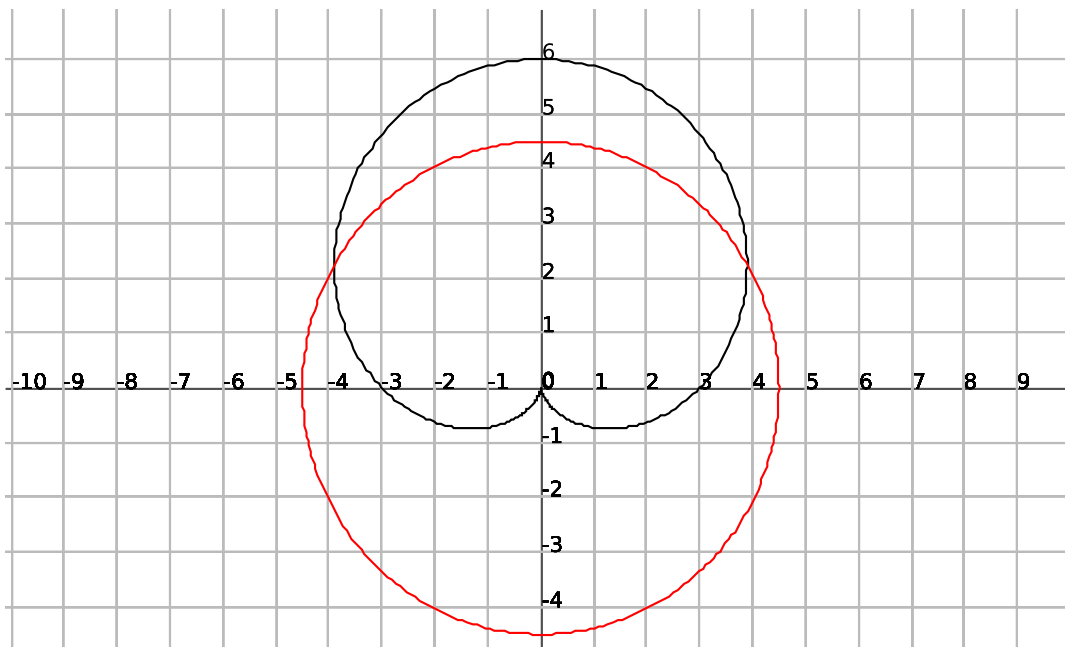
6. Find the area bounded inside $r = 2 \sin \theta$ and outside $r = \sqrt{2}$.



These two polar curves intersect when $2 \sin \theta = \sqrt{2} \Rightarrow \sin \theta = \frac{\sqrt{2}}{2} \Rightarrow \theta = \frac{\pi}{4}$ to $\theta = \frac{3\pi}{4}$. Using symmetry, we will integrate from $\theta = \frac{\pi}{4}$ to $\theta = \frac{\pi}{2}$ and double that area.

$$\begin{aligned}
 \text{Area} = A &= 2 \left(\frac{1}{2} \int_{\frac{\pi}{4}}^{\frac{\pi}{2}} ((\text{outer } r)^2 - (\text{inner } r)^2) d\theta \right) = \int_{\frac{\pi}{4}}^{\frac{\pi}{2}} \left((2 \sin \theta)^2 - (\sqrt{2})^2 \right) d\theta \\
 &= \int_{\frac{\pi}{4}}^{\frac{\pi}{2}} 4 \sin^2 \theta - 2 d\theta = \int_{\frac{\pi}{4}}^{\frac{\pi}{2}} 4 \left(\frac{1 - \cos(2\theta)}{2} \right) - 2 d\theta \\
 &= \int_{\frac{\pi}{4}}^{\frac{\pi}{2}} 2 - 2 \cos(2\theta) - 2 d\theta = \int_{\frac{\pi}{4}}^{\frac{\pi}{2}} -2 \cos(2\theta) d\theta \\
 &= -\sin(2\theta) \Big|_{\frac{\pi}{4}}^{\frac{\pi}{2}} = -\sin \pi - \left(-\sin \left(\frac{\pi}{2} \right) \right) = 0 + 1 = \boxed{1}
 \end{aligned}$$

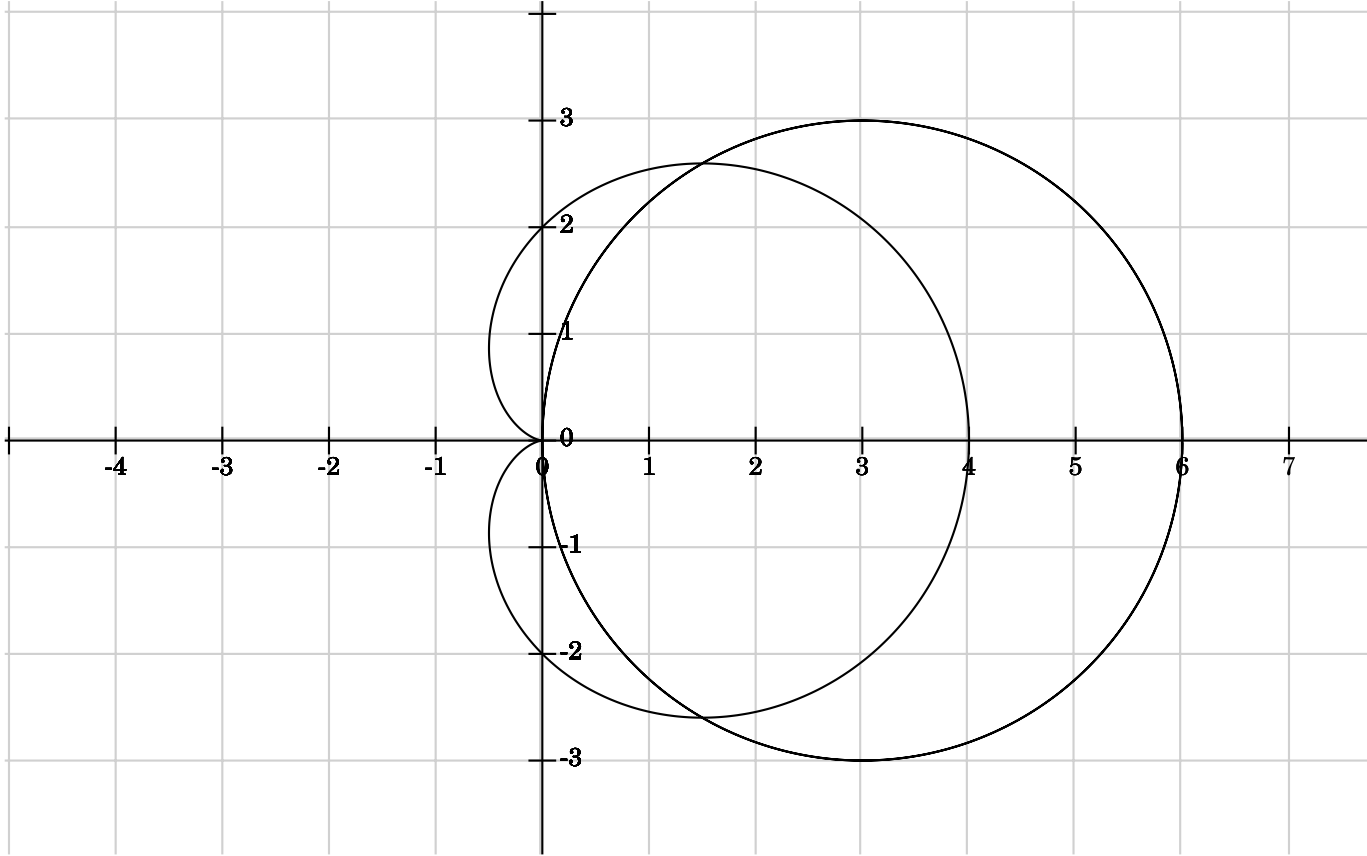
7. Find the area bounded inside $r = 3 + 3 \sin \theta$ and outside $r = \frac{9}{2}$.



These two polar curves intersect when $3 + 3 \sin \theta = \frac{9}{2} \Rightarrow 3 \sin \theta = \frac{3}{2} \Rightarrow \sin \theta = \frac{1}{2} \Rightarrow \theta = \frac{\pi}{6}$ to $\theta = \frac{5\pi}{6}$. Using symmetry, we will integrate from $\theta = \frac{\pi}{6}$ to $\theta = \frac{\pi}{2}$ and double that area.

$$\begin{aligned}
 \text{Area} = A &= 2 \left(\frac{1}{2} \int_{\frac{\pi}{6}}^{\frac{\pi}{2}} ((\text{outer } r)^2 - (\text{inner } r)^2) d\theta \right) = \int_{\frac{\pi}{6}}^{\frac{\pi}{2}} \left((3 + 3 \sin \theta)^2 - \left(\frac{9}{2}\right)^2 \right) d\theta \\
 &= \int_{\frac{\pi}{6}}^{\frac{\pi}{2}} 9 + 18 \sin \theta + 9 \sin^2 \theta - \frac{81}{4} d\theta = \int_{\frac{\pi}{6}}^{\frac{\pi}{2}} 9 + 18 \sin \theta + 9 \left(\frac{1 - \cos(2\theta)}{2} \right) - \frac{81}{4} d\theta \\
 &= \int_{\frac{\pi}{6}}^{\frac{\pi}{2}} 9 + 18 \sin \theta + \frac{9}{2} - \frac{9}{2} \cos(2\theta) - \frac{81}{4} d\theta \\
 &= \int_{\frac{\pi}{6}}^{\frac{\pi}{2}} -\frac{27}{4} + 18 \sin \theta - \frac{9}{2} \cos(2\theta) d\theta \\
 &= -\frac{27}{4} \theta - 18 \cos \theta - \frac{9}{4} \sin(2\theta) \Big|_{\frac{\pi}{6}}^{\frac{\pi}{2}} \\
 &= \left(-\frac{27\pi}{8} - 18 \cos\left(\frac{\pi}{2}\right) - \frac{9}{4} \sin(\pi) \right) - \left(-\frac{27\pi}{24} - 18 \cos\left(\frac{\pi}{6}\right) - \frac{9}{4} \sin\left(\frac{\pi}{3}\right) \right) \\
 &= -\frac{27\pi}{8} - 0 - 0 + \frac{9\pi}{8} + 18 \left(\frac{\sqrt{3}}{2} \right) + \frac{9}{4} \left(\frac{\sqrt{3}}{2} \right) = -\frac{27\pi}{8} - 0 - 0 + \frac{9\pi}{8} + 9\sqrt{3} + \frac{9\sqrt{3}}{8} \\
 &= \frac{81\sqrt{3}}{8} - \frac{18\pi}{8} = \boxed{\frac{81\sqrt{3}}{8} - \frac{9\pi}{4}}
 \end{aligned}$$

8. Find the area bounded outside the polar curve $r = 2 + 2 \cos \theta$ and inside the polar curve $r = 6 \cos \theta$.



These two polar curves intersect when $2 + 2 \cos \theta = 6 \cos \theta \Rightarrow 4 \cos \theta = 2 \Rightarrow \cos \theta = \frac{1}{2} \Rightarrow \theta = -\frac{\pi}{3}$ or $\theta = \frac{\pi}{3}$. Using symmetry, we will integrate from $\theta = 0$ to $\theta = \frac{\pi}{3}$ and double that area.

$$\begin{aligned}
 \text{Area} = A &= 2 \left(\frac{1}{2} \int_0^{\frac{\pi}{3}} ((\text{outer } r)^2 - (\text{inner } r)^2) d\theta \right) = \int_0^{\frac{\pi}{3}} ((6 \cos \theta)^2 - (2 + 2 \cos \theta)^2) d\theta \\
 &= \int_0^{\frac{\pi}{3}} 36 \cos^2 \theta - (4 + 8 \cos \theta + 4 \cos^2 \theta) d\theta = \int_0^{\frac{\pi}{3}} 36 \cos^2 \theta - 4 - 8 \cos \theta - 4 \cos^2 \theta d\theta \\
 &= \int_0^{\frac{\pi}{3}} 32 \cos^2 \theta - 4 - 8 \cos \theta d\theta = \int_0^{\frac{\pi}{3}} 32 \left(\frac{1 + \cos(2\theta)}{2} \right) - 4 - 8 \cos \theta d\theta \\
 &= \int_0^{\frac{\pi}{3}} 16(1 + \cos(2\theta)) - 4 - 8 \cos \theta d\theta = \int_0^{\frac{\pi}{3}} 16 + 16 \cos(2\theta) - 4 - 8 \cos \theta d\theta \\
 &= \int_0^{\frac{\pi}{3}} 12 + 16 \cos(2\theta) - 8 \cos \theta d\theta \\
 &= 12\theta + 8 \sin(2\theta) - 8 \sin \theta \Big|_0^{\frac{\pi}{3}} = \left(12 \left(\frac{\pi}{3} \right) + 8 \sin \left(\frac{2\pi}{3} \right) - 8 \sin \left(\frac{\pi}{3} \right) \right) - (0 + 0 - 0) \\
 &= 4\pi + 8 \left(\frac{\sqrt{3}}{2} \right) - 8 \left(\frac{\sqrt{3}}{2} \right) = \boxed{4\pi}
 \end{aligned}$$